


# WHAT'S THE TIME?



TO

PAST

... O'CLOCK

FIVE TO...

FIVE PAST...

TEN TO...

TEN PAST...

QUARTER TO...

QUARTER PAST...

TWENTY TO...

TWENTY PAST...

TWENTY-FIVE TO...

TWENTY-FIVE PAST...

HALF PAST...

15 minutes = a quarter  
30 minutes = half



REMEMBER!

a.m.- in the morning


p.m.-in the afternoon ,in the evening

- |                                  |                                  |
|----------------------------------|----------------------------------|
| 6.00 - It's six o'clock          | 6.35 - It's twenty-five to seven |
| 6.05 - It's five past six        | 6.40 - It's twenty to seven      |
| 6.10 - It's ten past six         | 6.45 - It's a quarter to seven   |
| 6.15 - It's a quarter past six   | 6.50 - It's ten to seven         |
| 6.20 - It's twenty past six      | 6.55 - It's five to seven        |
| 6.25 - It's twenty-five past six | 7.00 - It's seven o'clock        |
| 6.30 - It's half past six        |                                  |

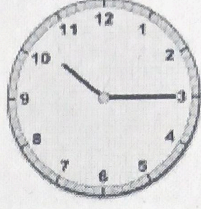
It's your turn now.  
What's the time?




It's \_\_\_\_\_




It's \_\_\_\_\_




It's \_\_\_\_\_



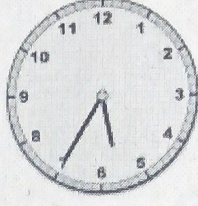
It's \_\_\_\_\_




It's \_\_\_\_\_




It's \_\_\_\_\_




It's \_\_\_\_\_




It's \_\_\_\_\_




It's \_\_\_\_\_



It's \_\_\_\_\_




It's \_\_\_\_\_




It's \_\_\_\_\_

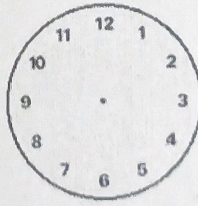
Draw :



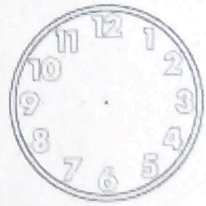
It's quarter to two




It's half past one



It's twenty to eleven




It's ten past three



It's nine o'clock



It's quarter past three



It's ten to ten



It's twenty-seven past twelve